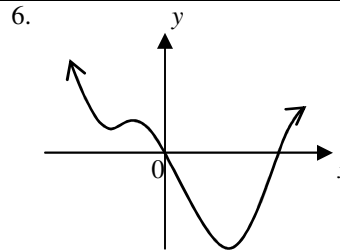
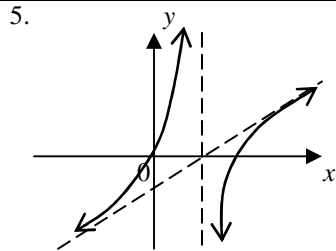
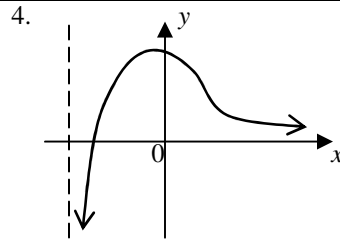
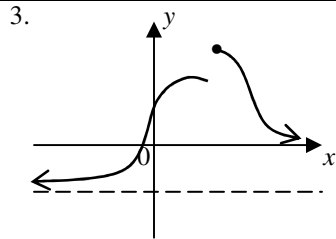
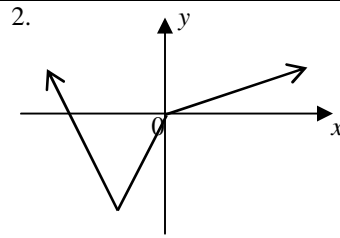
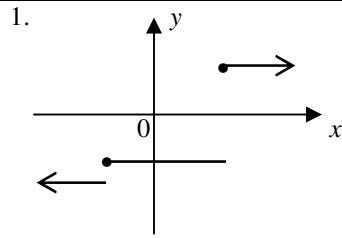


Q1 to 6. Deduce the graph of gradient function $f'(x)$ from the given graph of function $f(x)$.



Q7 to 12. Deduce the graph of the original function $f(x)$ from the given graph of $f'(x)$ or an anti-derivative function $F(x)$.

